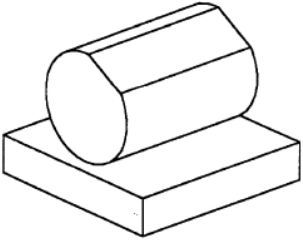
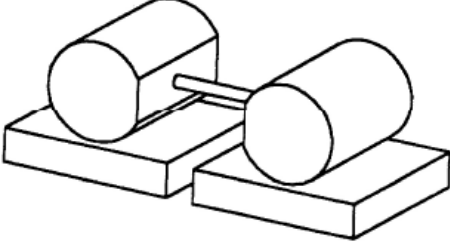
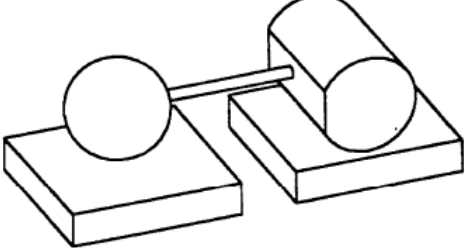
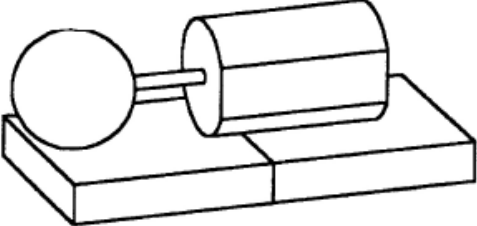
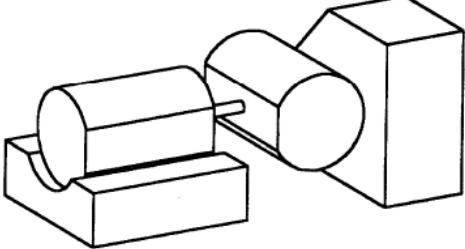
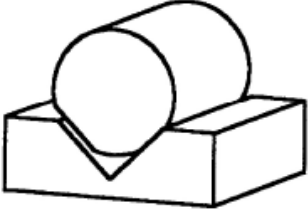
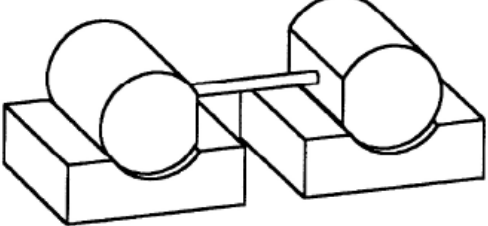
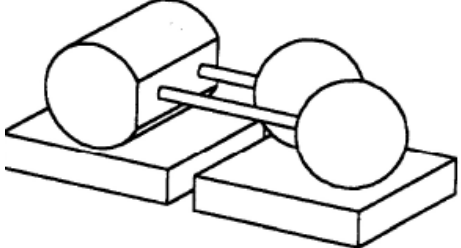
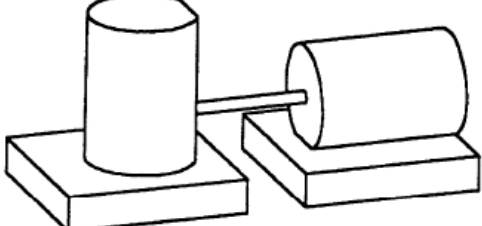
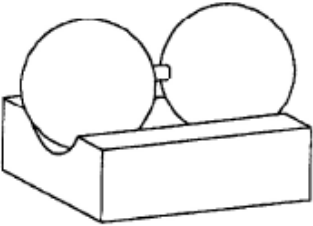


## TD 1: Making Connections

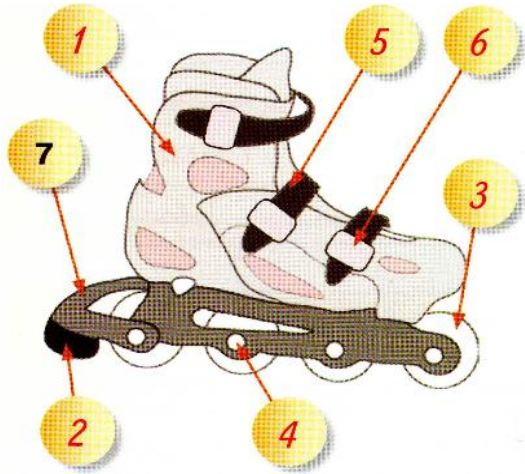
### Exercise 1 :

Binding name	Movement	Planar representation	Examples												
	<table border="1"> <tr> <td></td> <td>T</td> <td>R</td> </tr> <tr> <td>x</td> <td></td> <td></td> </tr> <tr> <td>y</td> <td></td> <td></td> </tr> <tr> <td>z</td> <td></td> <td></td> </tr> </table>		T	R	x			y			z			<p>S1 S2 Degree of freedom = 0</p>	
	T	R													
x															
y															
z															
	<table border="1"> <tr> <td></td> <td>T</td> <td>R</td> </tr> <tr> <td>x</td> <td></td> <td></td> </tr> <tr> <td>y</td> <td></td> <td></td> </tr> <tr> <td>z</td> <td></td> <td></td> </tr> </table>		T	R	x			y			z				
	T	R													
x															
y															
z															
	<table border="1"> <tr> <td></td> <td>T</td> <td>R</td> </tr> <tr> <td>x</td> <td></td> <td></td> </tr> <tr> <td>y</td> <td></td> <td></td> </tr> <tr> <td>z</td> <td></td> <td></td> </tr> </table>		T	R	x			y			z				
	T	R													
x															
y															
z															
	<table border="1"> <tr> <td></td> <td>T</td> <td>R</td> </tr> <tr> <td>x</td> <td></td> <td></td> </tr> <tr> <td>y</td> <td></td> <td></td> </tr> <tr> <td>z</td> <td></td> <td></td> </tr> </table>		T	R	x			y			z				
	T	R													
x															
y															
z															
	<table border="1"> <tr> <td></td> <td>T</td> <td>R</td> </tr> <tr> <td>x</td> <td></td> <td></td> </tr> <tr> <td>y</td> <td></td> <td></td> </tr> <tr> <td>z</td> <td></td> <td></td> </tr> </table>		T	R	x			y			z			<p>S1 S2</p>	
	T	R													
x															
y															
z															

**Exercise 2:**

	
<p>Number of Authorized <b>Translations</b> :            ..... Number of Authorized <b>Rotations</b>            : .....</p> <p><b>Type of connection</b> :            .....</p>	<p>Number of Authorized <b>Translations</b> :            ..... Number of Authorized <b>Rotations</b>            : .....</p> <p><b>Type of connection</b> :            .....</p>
	
<p>Number of Authorized <b>Translations</b> : .....</p> <p>Number of Authorized <b>Rotations</b> : .....</p> <p><b>Type of connection</b> : .....</p>	<p>Number of Authorized <b>Translations</b> : .....</p> <p>Number of Authorized <b>Rotations</b> : .....</p> <p><b>Type of connection</b> : .....</p>
	
<p>Number of Authorized <b>Translations</b> : .....</p> <p>Number of Authorized <b>Rotations</b> : .....</p> <p><b>Type of connection</b> : .....</p>	<p>Number of Authorized <b>Translations</b> : .....</p> <p>Number of Authorized <b>Rotations</b> : .....</p> <p><b>Type of connection</b> : .....</p>
	
<p>Number of Authorized <b>Translations</b> : .....</p> <p>Number of Authorized <b>Rotations</b> : .....</p> <p><b>Type of connection</b> : .....</p>	<p>Number of Authorized <b>Translations</b> : .....</p> <p>Number of Authorized <b>Rotations</b> : .....</p> <p><b>Type of connection</b> : .....</p>
	
<p>Number of Authorized <b>Translations</b> : .....</p> <p>Number of Authorized <b>Rotations</b> : .....</p> <p><b>Type of connection</b> : .....</p>	<p>Number of Authorized <b>Translations</b> : .....</p> <p>Number of Authorized <b>Rotations</b> : .....</p> <p><b>Type of connection</b> : .....</p>

**Exercise 3:** Give the name of the connection between the elements.



Roller		
Rep .	Elements	Connection
`1 / 7	Slipper/Base	
`5 / 6	Strap/Buckle	
`4 / 3	Wheel axle/Wheel	
`4 / 7	Wheel Axle/Base	
`2 / 7	Brake/Base	